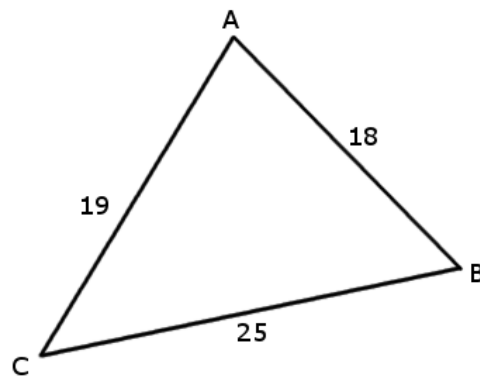
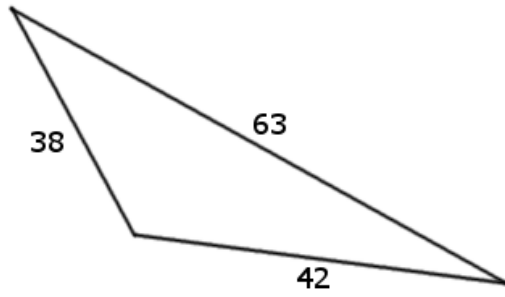


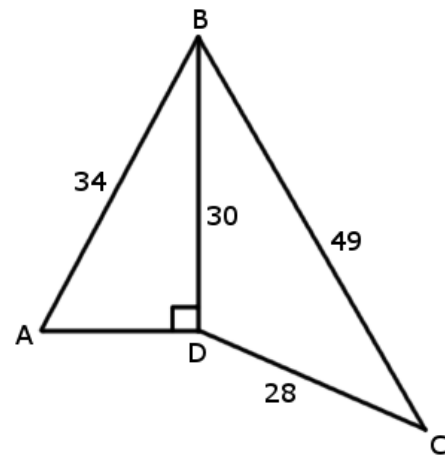
1. Determine the area of the triangle below.  
Round your answer to the nearest tenth of a unit.



2. Determine the area of the triangle below.  
Round your answer to the nearest tenth of a unit.



3. Determine the area of the complex shape ABCD below.  
Round your answer to the nearest integer.



4. Determine the area of the complex shape ABCD below.  
Round your answer to the nearest integer.

