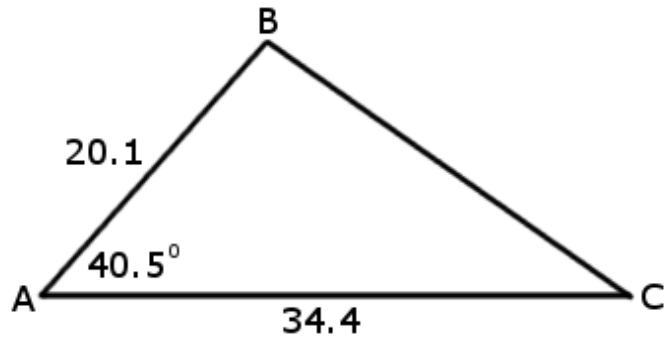
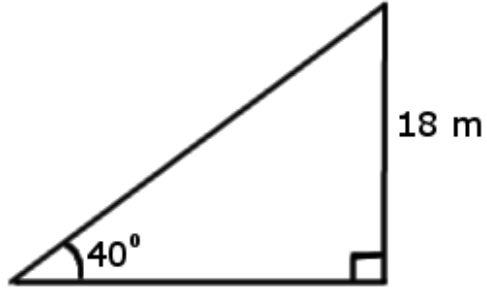


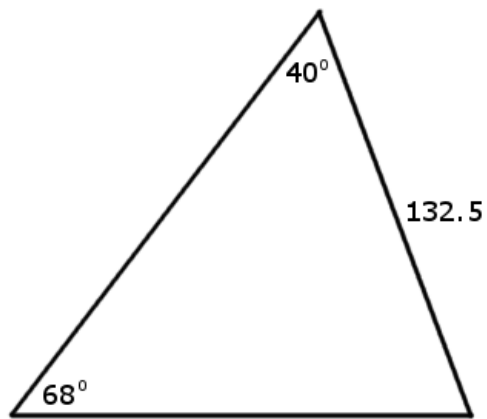
1. Determine the area of the triangle below.
Round your answer to the nearest tenth of a unit.



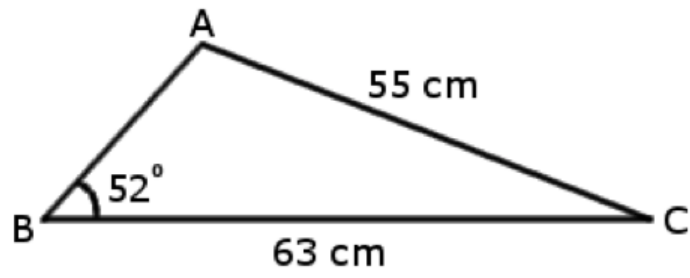
2. Determine the area of the triangle below.
Round your answer to the nearest integer.



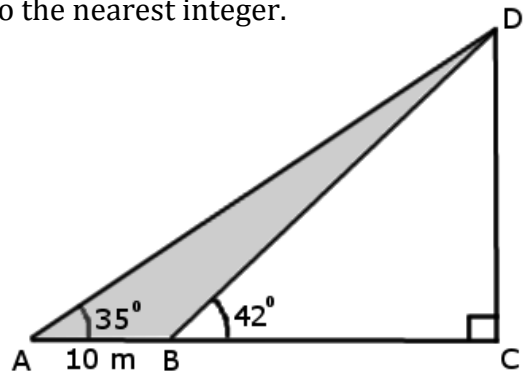
3. What is the area of the triangle below?
Round your answer to the nearest integer.



4. Determine the area of the triangle below.
Round your answer to the nearest integer.



5. Determine the area of triangle ABD.
Round your answer to the nearest integer.



6. What is the area of triangle ABC below?
Round your answer to the nearest integer.

